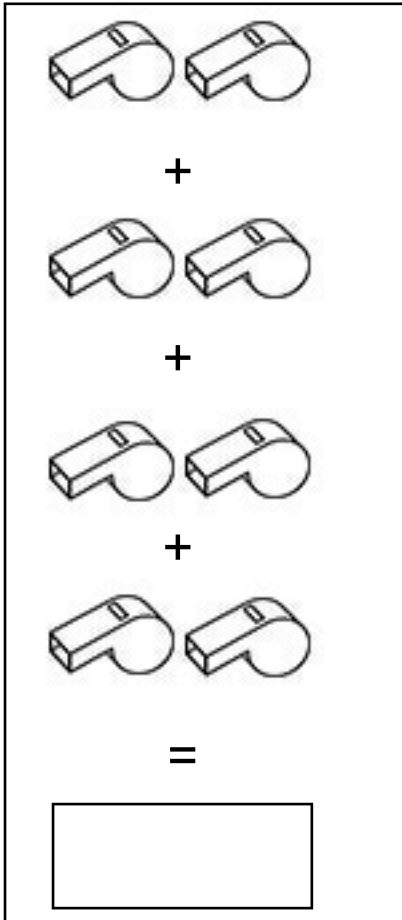
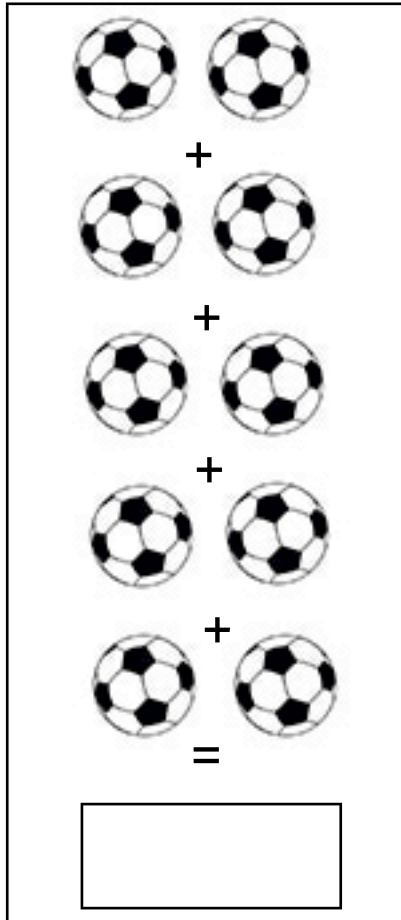


ATIVIDADE

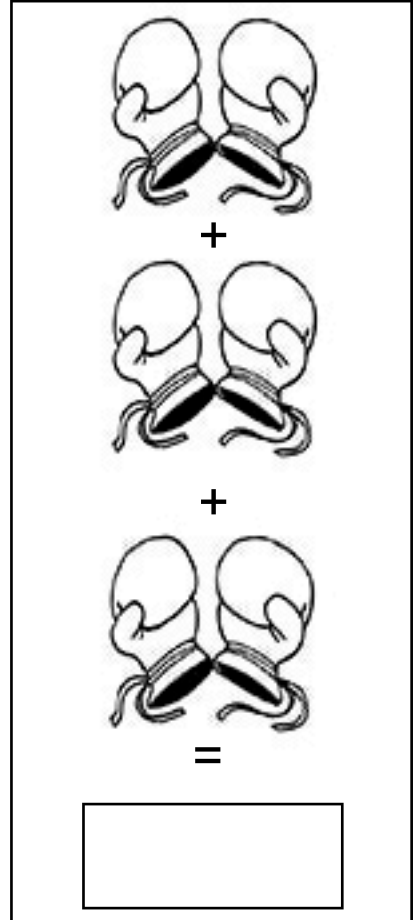
VAMOS AJUDAR OS MASCOTES VINICIUS E TOM CONTAR OS OBJETOS:



$+$
 $+$
 $+$
 $+$
 $=$



$+$
 $+$
 $+$
 $+$
 $+$
 $=$



$+$
 $+$
 $+$
 $=$



?

$$\begin{array}{r} 5 \\ + \\ 6 \\ \hline \end{array} \begin{array}{r} 0 \\ 8 \\ = \end{array}$$



?